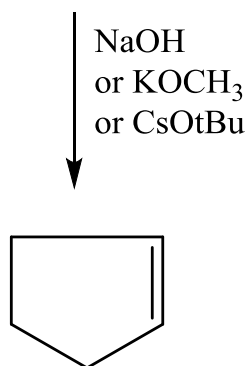
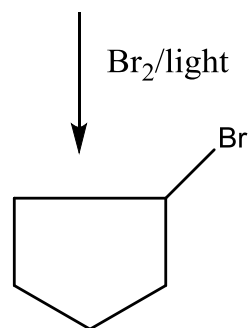
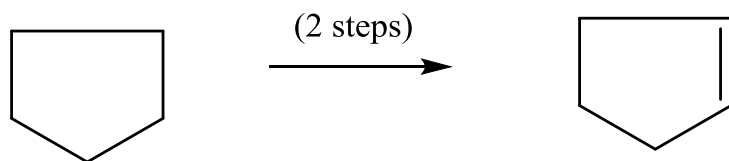


Quiz Nr. 4, March 8

Name: _____
last, first

Student Nr. _____



Show synthesis of cyclopentene from cyclopentane
Use any reagents you need